

DAILY GENERAL AWARENESS QUIZ



Rajnish Bhatnagar

www.scholarssscacademy.in 01141676717 info@scholarssscacademy.in

Friday, 25 October 2024

1. Karnataka wins 24th National Para-Swimming Championships 2024. In context to the same tell us, who won the Arjuna Award for Para Swimming at the National Sports Awards, 2020?

- (A) Gaurav Khanna (B) Mariyappan T
(C) Suyash Jadhav (D) Vijay Munishwar

2. India and Pakistan Renew Kartarpur Corridor Agreement Until 2029. In context to the same tell us, Kartarpur Sahib Corridor connects Kartarpur Gurudwara in Pakistan to Dera Baba Nanak Shrine in India's _____ district.

- (A) Amritsar (B) Gurdaspur
(C) Sangrur (D) Ludhiana

3. Egypt Declared Malaria-Free by World Health Organization in 2024. In context to the same tell us, The diagnostic tests of malaria includes all except -

- (A) Rapid diagnostic test (B) Serological test
(C) Microscope (D) Hemoglobin test

4. Paytm Receives NPCI Approval to Onboard New UPI Users. In context to the same tell us, The National Payments Corporation of India was set up under the provisions of which Act?

- (A) The SARFAESI Act, 2002
(B) Government Securities Act, 2006
(C) Companies Act, 2013
(D) Payment and Settlement Systems Act, 2007

5. Odisha Government Announces Menstrual Leave for Women Staff. In context to the same tell us, Parliament has passed Maternity Benefits Bill, 2016 to raise maternity leave for working women from 12 weeks to?

- (A) 22 weeks (B) 20 weeks
(C) 26 weeks (D) 24 weeks

6. Recently, the Prime Minister inaugurated three airports under the Regional Connectivity Scheme (RCS-UDAN) in Rewa (Madhya Pradesh), Ambikapur (Chhattisgarh), and Saharanpur (Uttar Pradesh). Consider the following statements regarding UDAN

Scheme -

- (1) Ude Desh Ka Aam Naagrik (UDAN) was launched under the Ministry of Civil Aviation in 2016.
(2) The first RCS-UDAN flight was inaugurated by the Prime Minister in 2017, connecting Shimla to Delhi.
(3) It supports only air routes served by Directorate General of Civil Aviation.

Which of the above is/are correct?

- (A) Only (1) and (3) (B) Only (1) and (2)
(C) Only (2) and (3) (D) None of the above

7. Recently, a collection of copper plate inscriptions featuring two leaves from the 16th Century CE was discovered at the Sri Singeeswarar temple in Mappedu village, Tiruvallur district of Tamil Nadu.

Consider the following statements regarding Vijaynagar Empire -

- (1) They made Hampi the capital city (declared a World Heritage site by UNESCO in 1986).
(2) Vijayanagar Empire was ruled by four important dynasties (Chandraditya, Vikramaditya, Vinayaditya).
(3) The empire lasted from 1336 until around 1660.

Which of the above is/are correct?

- (A) Only (1) and (3) (B) Only (1) and (2)
(C) Only (2) and (3) (D) None of the above

8. In the Commonwealth Games (CWG) 2026 Glasgow, six of the 12 sports in which India won medals at the 2022 Commonwealth Games have been excluded.

Consider the following statements regarding India in CWG -

- (1) Hockey has been part of the CWG since 1998, with India ranked as the second-best team in CWG history.
(2) Introduced in the CWG in 2002, India has won medals in table tennis at every edition, totalling 20 medals.
(3) The 12th Commonwealth Games were successfully hosted in Delhi in 2012.

Which of the above is/are correct?

- (A) Only (1) and (3) (B) Only (1) and (2)
(C) Only (2) and (3) (D) None of the above

1-{C} - 2-{B} - 3-{D} - 4-{D} - 5-{C} - 6-{B} - 7-{A} 8-{B}



scholarsacademy

Download

Scholars Academy



DAILY QUANT QUIZ



Friday, 25 October 2024

1. If $\cot A = 1$, ($0^\circ < A < 90^\circ$) then find the value of $\frac{\cos^2 A + 5 \sin^2 A + \operatorname{cosec} A}{\operatorname{cosec} A - \cos 2A + \tan^2\left(\frac{4A}{3}\right)}$ travelled 186 km, then find its speed at the end of 7th hour from the start.

- (A) 3/4 (B) 2/3 (C) 0 (D) 1 (A) 45 km/hr (B) 49 km/hr (C) 37 km/hr (D) 43 km/hr

2. Table given below shows the total number of students in different schools in 2020 and 2023.

School	Number of students in 2020	Number of students in 2023
P	1,500	1,900
Q	1,200	1,500
R	1,800	2,500
S	2,000	2,600

Percentage increase in number of students from 2020 to 2023 is maximum in which of the following school?

- (A) R (B) Q (C) S (D) P

3. The marked price of an article is 20 percent more than its cost price. What maximum discount percentage can be offered by the shopkeeper to sell his article so that there is no loss?

- (A) 16.66 % (B) 12.56 % (C) 13.33 % (D) 15.33 %

4. The angle of elevation from point 'P' on the ground to the top of a 240-metre high lighthouse is 30° . A fly wants to reach the top of the lighthouse in 60 seconds. What should be the speed of the fly to reach the destination on time by travelling the minimum distance?

- (A) 8 m/s (B) 6 m/s (C) 9 m/s (D) 12 m/s

5. A car increases its speed by 6 km/hr after every 2 hours. If at the end of 6 hours, the car has

6. A certain sum is invested at simple interest of 'x%' per annum for 2.5 years. Had it been invested at simple interest of $(x + 6)$ % per annum, for the same time, it would have fetched Rs. 4,410 more. Find the sum invested.

- (A) Rs. 28,400 (B) Rs. 29,400 (C) Rs. 32,700 (D) Rs. 28,800

7. Average of seven consecutive even numbers is 32. Find the difference between squares of smallest and largest number out of the given seven numbers.

- (A) 698 (B) 728 (C) 684 (D) 768

8. Find the simplified value of the given expression:

$$9 \times 12 \div 6 \text{ of } \left(\frac{1}{3}\right) + 33 - 14 + \left(\frac{12}{15}\right) \times \left(\frac{5}{2}\right)$$

(A) 48 (B) 54 (C) 69 (D) 76

9. Simplify the following trigonometric expression:

$$\operatorname{cosec} A \sqrt{1 - \cos^2 A} + \tan^2 A$$

(A) 1 (B) $\operatorname{cosec}^2 A$ (C) -1 (D) $\sec^2 A$

10. XYM and XZN are two tangents of a circle at point Y and Z respectively and ZB is the diameter of circle with centre O. If $\angle MXN = 50^\circ$ then find $\angle BYM$.

- (A) 30° (B) 20° (C) 25° (D) 15°

1-{D} - 2-{A} - 3-{A} - 4-{A} - 5-{D} - 6-{B} - 7-{D} - 8-{C} - 9-{D} - 10-{C}



DAILY REASONING QUIZ



Rajnish Bhatnagar

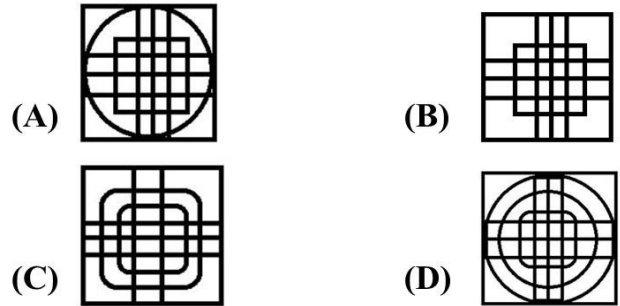
www.scholarssscacademy.in | 01141676717 | info@scholarssscacademy.in

Friday, 25 October 2024

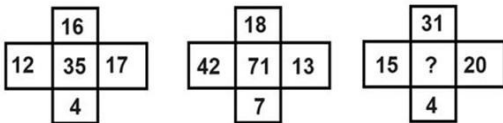
1. Select the option that is related to the third term in the same way as the second term is related to first term.

SECRETARY: CRARSETYE::MONASTERY: ?

- (A) MNARSETYO (B) MNARSOTYE
(C) AEOMNRSTY (D) MNRSTY AEO



2. In the following figure what will come in place of question mark(?) .



- (A) 159 (B) 99
(C) 89 (D) 78

3. Select the number that can replace the question mark (?) in the following series.

4, 8, 14, ?, 36.5, 56.75

- (A) 25 (B) 23
(C) 22 (D) 24

4. In a certain code language, FLARES is written as 4230118516 and POSTFIX is written as 221516144296. How will SYMBOL be written in that language?

- (A) 16428501530 (B) 16408521530
(C) 16448612530 (D) 16428501630

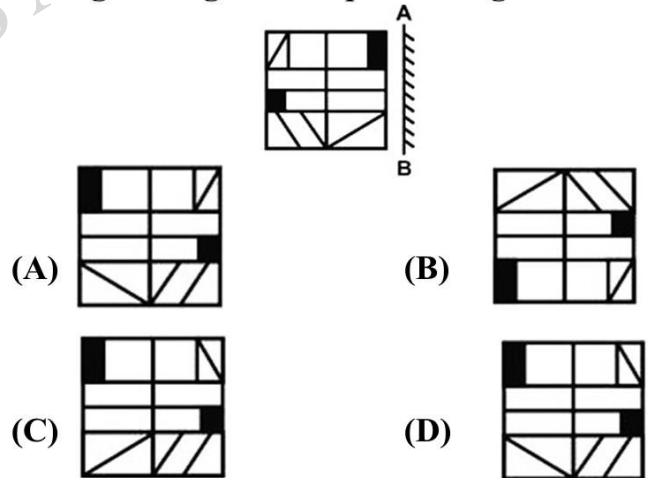
5. Select the option in which the following figure is embedded. (Rotation is NOT allowed)



6. In the following question, select the number pair which is different from the rest in the given alternatives.

- (A) 17 - 60 (B) 23 - 87
(C) 45 - 170 (D) 33 - 126

7. If a mirror is placed on the line AB, then out of the option figures which figure will be the right image of the question figure?



8. In a certain code language, 'GIRL' is coded as 'QWNL'. What is the code for 'KEPT' in that code language?

- (A) YUKR (B) YUKP
(C) YVJP (D) YUJP

1-{A} - 2-{C} - 3-{B} - 4-{A}-5-{D}-6-{C}-7-{D}-8-{D}

DAILY GENERAL STUDIES QUIZ



Friday, 25 October 2024

POLITY

1. _____ makes laws on matters included in Union List and Concurrent List.

- (A) Lok Sabha
- (B) Ministry of Defence
- (C) Prime Minister's Office
- (D) Securities and Exchange Board of India

2. "Population control and family planning" is listed in the _____ list given in the Seventh Schedule in the Constitution of India.

- (A) Union
- (B) State
- (C) Global
- (D) Concurrent

3. "Central Bureau of Intelligence and Investigation" is listed in the _____ list given in the Seventh Schedule in the Constitution of India.

- (A) Union
- (B) State
- (C) Global
- (D) Concurrent

4. Who was the first President of the All India Trade Union Congress (AITUC)?

- (A) C.R. Das
- (B) V.V. Giri
- (C) Lala Lajpat Rai
- (D) Sarojini Naidu

5. Which one of the following is an example of direct democracy in India?

- (A) Zila Panchayat
- (B) Gram Sabha
- (C) Kshetra Panchayat
- (D) Nagar Panchayat

6. How many seats should a political party have in order to be recognised as an official opposition Group in the Parliament?

- (A) 1/6th of the total strength
- (B) 1/10th of the total strength

- (C) 1/4th of the total strength
- (D) 1/3rd of the total strength

7. Article 14 of the Indian Constitution guarantees Indian citizens:

- (A) Equality before law.
- (B) Equal distribution of economic resources.
- (C) Equality before law and equal protection of the laws.
- (D) Equal protection of laws.

8. Which of the following is not true regarding the Chief Election Commissioner of India?

- (A) President appoints the Chief Election Commissioner of India.
- (B) Chief Election Commissioner of India can be by the same process as applicable to judge of Supreme Court.
- (C) Other election commissioners can be removed by the president on the recommendation of Chief Election Commission of India.
- (D) T. Swaminathan was the first Chief Election Commissioner of India.

9. The Central Government gets the power to provide reservations in jobs and educational institutions for the weaker sections of the society due to which of the following Constitutional provision?

- (A) Article 51
- (B) Article 16
- (C) Article 14
- (D) Article 41

10. The Estimates Committee consists of member from which of the following?

- (A) Parliament
- (B) Lok Sabha
- (C) Union Territories
- (D) State Assemblies

1-{A} - 2-{D} - 3-{A} - 4-{C} - 5-{B} - 6-{B} - 7-{C} - 8-{D} - 9-{B} - 10-{B}



DAILY ENGLISH VOCAB



Friday, 25 October 2024

(VOCABULARY)

1. Beset

Definition: (of a problem or difficulty) trouble (someone or something) persistently.

Synonyms: plague, bedevil, attack, assail, beleaguer, afflict, torment, torture, rack, oppress, trouble.

Antonyms: clarify, please, exclude.

Usage: The social problems that beset the UK.

2. Intended

Definition: Planned or meant.

Synonyms: deliberate, intentional, calculated, conscious, done on purpose, planned, considered.

Antonyms: accidental, sudden, unknown.

Usage: The intended victim escaped.

3. Tweaks

Definition: Twist or pull (something) sharply.

Synonyms: pull sharply, twist, tug, pinch, nip, twitch, squeeze, jerk.

Antonyms: straighten, align.

Usage: He tweaked the boy's ear.

4. Congenial

Definition: (of a thing) pleasant or agreeable because suited to one's taste or inclination.

Synonyms: pleasant, pleasing, to one's liking, agreeable, enjoyable, pleasurable, nice, appealing, engaging.

Antonyms: disagreeable, incompatible.

Usage: He went back to a climate more

congenial to his cold, stony soul.

(WORD SUBSTITUTION)

5. A basket in which the fishermen puts his fish- **Creel**

6. The shelter of a gipsy- **Caravan**

(MISPELT WORDS)

Find the correctly spelt word.

7. (A) Embarassing (B) Embarressing
(C) Emberrassing (D) **Embarrassing**

8. (A) Disghusting (B) Disgasting
(C) **Disgusting** (D) Desgusting

(IDIOMS AND PHRASES)

9. Close to home

Meaning - A comment which is true and makes you uncomfortable is close to home.

Example - Tom's comment about his friend's unethical activities was quite close to home. He looked quite embarrassed.

10. Carry the torch for

Meaning - Having strong feelings for someone who cannot be yours.

Example - He has been carrying a torch for Mamta, who is now married to Nitin, since they studied together in college.



DAILY STATIC GK QUIZ



Friday, 25 October 2024

- Which phylum includes animals with jointed appendages? **Arthropoda**
- What is the excretory structure in earthworms? **Nephridia**
- Which class of animals has a three-chambered heart, moist skin, and lays eggs in water? **Amphibia**
- Which phylum consists of organisms with a water vascular system? **Echinodermata**
- What is the primary respiratory organ in fish? **Gills**
- Which invertebrate phylum lacks true tissues and organs? **Porifera**
- In which class of animals do you find feathers and the ability to fly? **Aves (Birds)**
- What type of symmetry do cnidarians exhibit? **Radial symmetry**
- Which animal phylum is known for having segmented bodies? **Annelida**
- Members of the Rhodophyte are commonly called **red algae**.





Friday, 25 October 2024

Commonwealth Games

Why in News?

In the **Commonwealth Games (CWG) 2026** Glasgow, six of the 12 sports in which India won medals at the 2022 Commonwealth Games have been excluded.



Expository: -

- In the **Commonwealth Games (CWG) 2026** Glasgow, six of the 12 sports in which India won medals at the 2022 Commonwealth Games have been excluded.
- The **23rd edition of the Commonwealth Games** will be held in Scotland from 23rd July to 2nd August 2026, marking a return to the city 12 years after the 2014 Games.
- **Composition:** The Commonwealth of Nations consists of 56 countries, mostly former British colonies.
- **Establishment:** Formally established by the London Declaration in 1949.
- **Three European members:** Cyprus, Malta, and the United Kingdom.
- **CGF Headquarters:** The CGF is headquartered and incorporated in the United Kingdom. It operates across 72 member nations and territories.
- **First Edition:** The first Commonwealth Games were held in Hamilton, Ontario, Canada, in August 1930.

- **India at the Commonwealth Games:** India has been a regular and prominent participant in the Commonwealth Games (CWG) since its debut in 1934, except 1930, 1950, 1962 and 1986.
- **2010 Delhi Games:** India hosted the Commonwealth Games for the first time in New Delhi, finishing second on the medal tally with a record 101 medals.
- **2022 Birmingham Games:** India finished fourth in the medal tally, securing 61 medals, including 22 gold.
- Some **recent Commonwealth Games** have been held in various cities globally - Manchester, UK (**2002**), Melbourne, Australia (**2006**), Delhi, India (**2010**), Glasgow, Scotland (**2014**), Gold Coast, Australia (**2018**), and Birmingham, UK (**2022**).

